

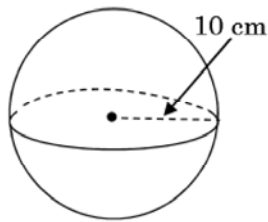
Sphere Problems

11.09

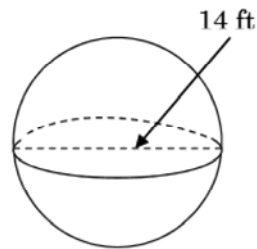
Sphere formulas: Volume = _____ Surface Area = _____

#1-4. Find the volume and surface area of the following:

1.



2.

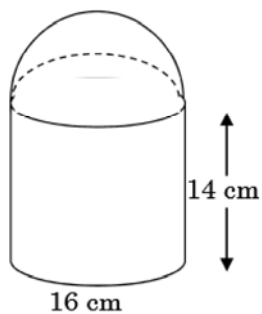


3. A sphere with circumference of 37.7 cm.

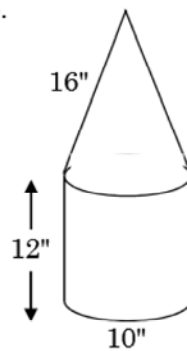
4. A sphere with diameter 18".

#5-6. Find volume and surface area for the figures shown. Be careful with surface area calculations.

5.



6.



Scrambled answers: 1340, 452, 1256, 1017, 1306, 4187, 615, 706, 3052, 1436, 3885, 904